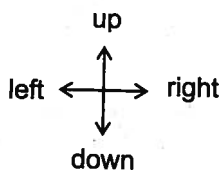
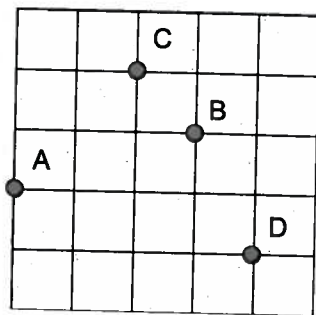


3. Answer the following questions using the coordinate system.

HINT: Underline the word "from" in each question.



a) What point is 2 units right and 2 up from A?

b) What point is 4 units left and 1 up from D?

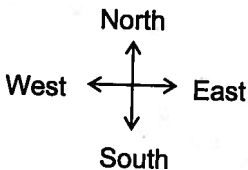
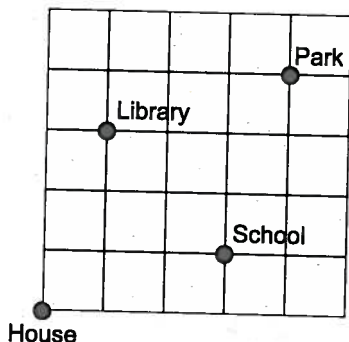
c) What point is 1 unit down and 1 right from C?

d) Describe how to get from point B to point D:

e) Describe how to go to point B from point A:

f) Describe how to get to point A from point C:

4. Answer the following questions using the grid.



a) What building is 1 block east and 3 blocks north of the house?

b) What building is 2 blocks west and 2 blocks north of the school?

c) What building is 1 block south and 3 blocks west of the school?

d) Describe how to get from the park to the school:

e) Describe how to go to the library from the school:

f) Describe how to go to the park from the library: