

5. Circle the dot where the two lines meet.




Column 1
Row 3



Column 2
Row 2



Column 1
Row 2



Column 3
Row 3



Column 1
Row 1



Column 2
Row 3




Column 2
Row 1




Column 3
Row 1


6. Identify the proper column and row for the circled dot.




Column _____
Row _____




Column _____
Row _____



Column _____
Row _____




Column _____
Row _____




Column _____
Row _____



Column _____
Row _____




Column _____
Row _____



Column _____
Row _____

BONUS

7. Identify the proper column and row for the circled dot.



Column _____
Row _____



