


Sonia owns a digital watch. She knows that




means that it is 12:30 or, in words, "thirty minutes after twelve".

She is also learning to take the time on her digital watch and convert it into the proper time on an analog clock.



is the same time as



**NOTE:**

It is thirty minutes after twelve. That means the minute hand is on the 6 (count by 5s until you hit 30) and the hour hand is between the 12 and the 1.

1. Give the time on the following digital clocks in two ways: i) in numbers; and ii) in words. The first one has been done for you.

a)



04 : 59

Fifty-nine minutes after four

---



---

b)



\_\_\_\_\_ : \_\_\_\_\_

---



---

c)



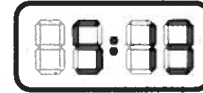
\_\_\_\_\_ : \_\_\_\_\_

---



---

d)



\_\_\_\_\_ : \_\_\_\_\_

---



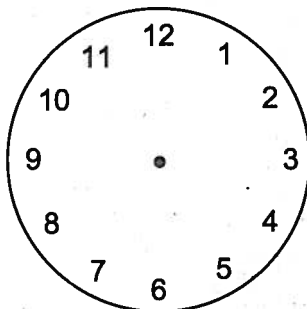
---

2. Give the time on the following digital clocks in two ways: i) in numbers; and ii) on an analog clock.

a)



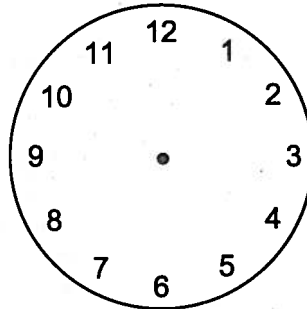
\_\_\_\_\_ : \_\_\_\_\_



b)



\_\_\_\_\_ : \_\_\_\_\_



c)



\_\_\_\_\_ : \_\_\_\_\_

