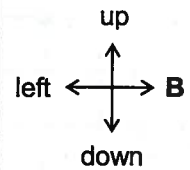
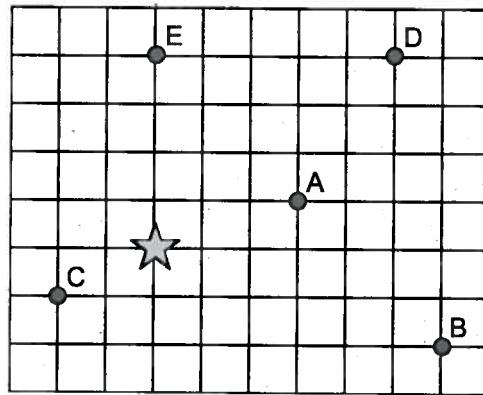


1. How many units (right/left and up/down) must the star slide to reach the following points? Use the words right/left and up/down in your answer.

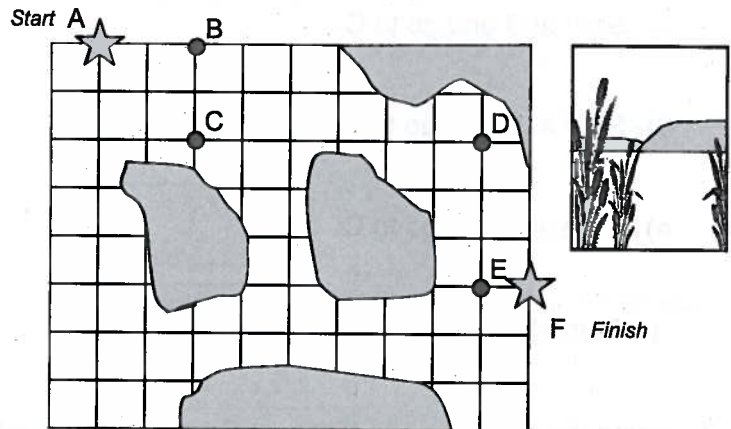
- A. right 3, up 1
- B. \_\_\_\_\_
- C. \_\_\_\_\_
- D. \_\_\_\_\_
- E. \_\_\_\_\_



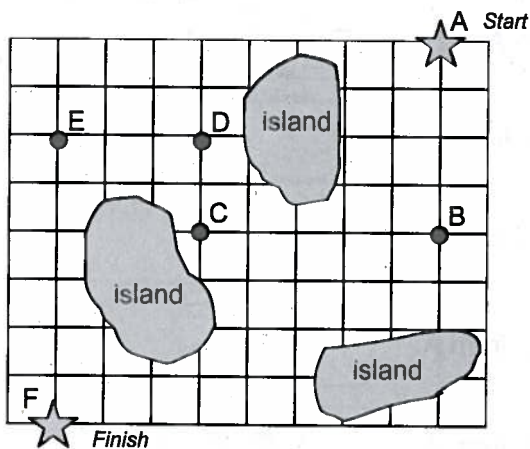
2. Lynne crossed the swamp without walking in any quicksand! Describe the path she took.

HINT: Use the words "right", "left", "up" and "down".

- 1. From A (start) to B right 2
- 2. From B to C \_\_\_\_\_
- 3. From C to D \_\_\_\_\_
- 4. From D to E \_\_\_\_\_
- 5. From E to F (finish) \_\_\_\_\_



3. Describe the path Brad took to canoe across the lake.



- 1. From A (start) to B \_\_\_\_\_
- 2. From B to C \_\_\_\_\_
- 3. From C to D \_\_\_\_\_
- 4. From D to E \_\_\_\_\_
- 5. From E to F (finish) \_\_\_\_\_

4. Can you see a shorter route to get from the start to the finish in Question 3? Write the directions for your route in your notebook.