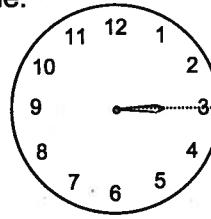


The **hour hand** gives the hour (or "o'clock") portion of the time.

For example:

If the hour hand is pointing directly at the 3,
the hour is **3** or **3:00**.




HINT:
If it helps, you can draw a line
extending past the hour hand.

However, the hour hand does not always point directly at a number. Often it points **between** numbers.

For example:

If the hour hand is pointing **between** the 7 and the 8,
what is the hour?

The hand moves around in a clockwise direction.
So the time is after 7 o'clock but before 8 o'clock.

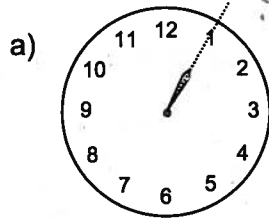


The hands always move
in a **clockwise** direction.

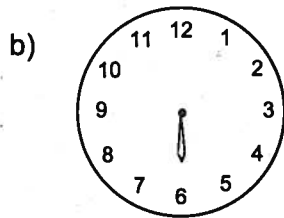
So we know that **the hour is still 7**.

NOTE: In this case, the minute portion of the time will be
something other than :00.

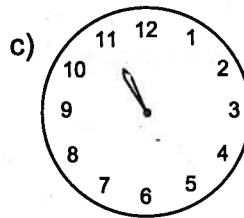
1. What is the hour? The first one has been done for you.



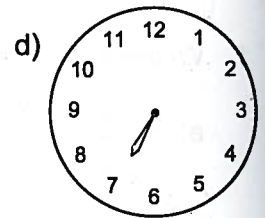
Hour: 1



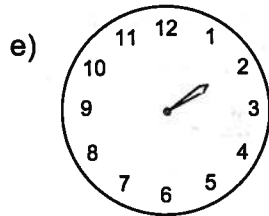
Hour:



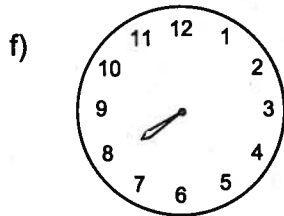
Hour:



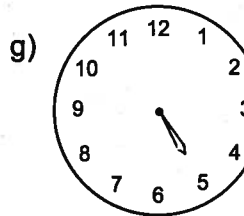
Hour:



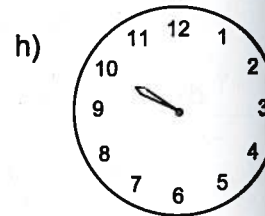
Hour:



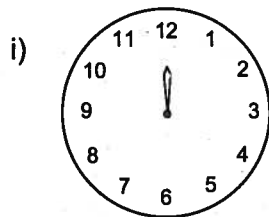
Hour:




Hour:



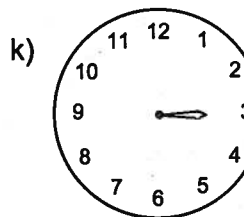
Hour:



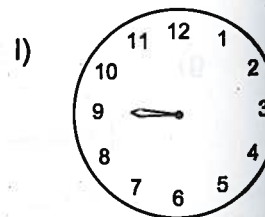
Hour:



Hour:



Hour:



Hour: