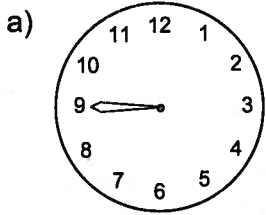
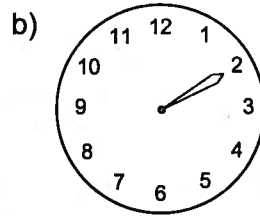



2. How many minutes after the hour is it? Remember to count by 5s.



It is 45 minutes after the hour.

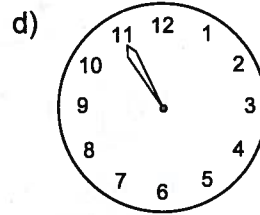


It is \_\_\_\_\_ minutes after the hour.



\_\_\_\_\_

\_\_\_\_\_

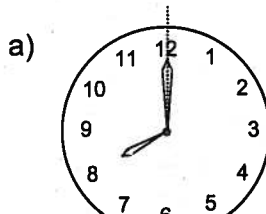


\_\_\_\_\_

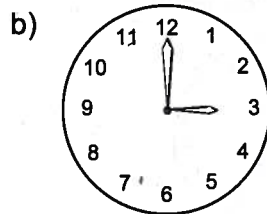
\_\_\_\_\_

3. Find the number of minutes that have passed by counting by 5s around the clock until you reach the minute hand. It might be a good idea to put a line through it first.

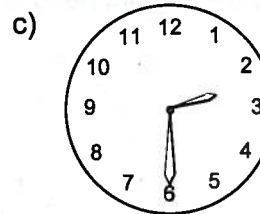
**REMEMBER:** The minute hand is the long hand.



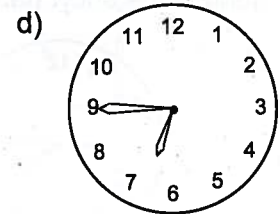
□□: 00



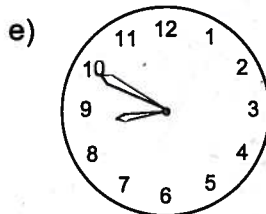
□□: \_\_\_\_\_



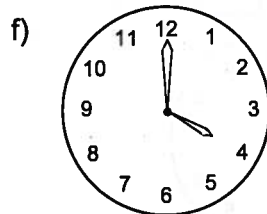
□□: \_\_\_\_\_



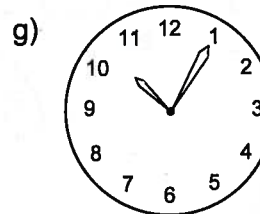
□□: \_\_\_\_\_



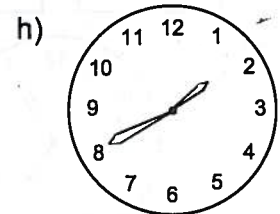
□□: \_\_\_\_\_



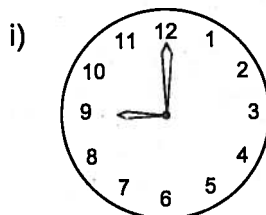
□□: \_\_\_\_\_



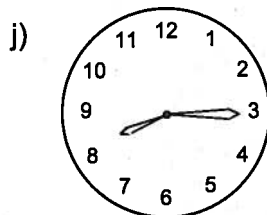
□□: \_\_\_\_\_



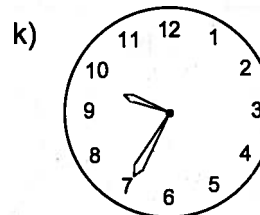
□□: \_\_\_\_\_



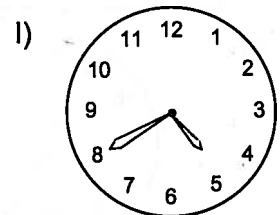
□□: \_\_\_\_\_



□□: \_\_\_\_\_



□□: \_\_\_\_\_



□□: \_\_\_\_\_