

The time period from 12 o'clock midnight to 12 o'clock noon (not including noon) is called **a.m.**

The time period from 12 o'clock noon to 12 o'clock midnight (not including midnight) is called **p.m.**

1. a) Skip count by 3s.

3 , 6 , _____ , _____ , _____ , _____ , _____

b) Skip count by 30s.

30 , 60 , _____ , _____ , _____ , _____ , _____

2. There are 30 minutes in half an hour.

Skip count by 30s to find out how many half hours are in...

a) 90 minutes

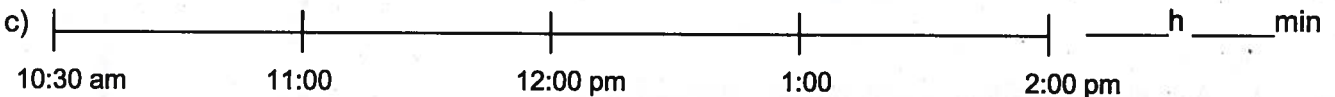
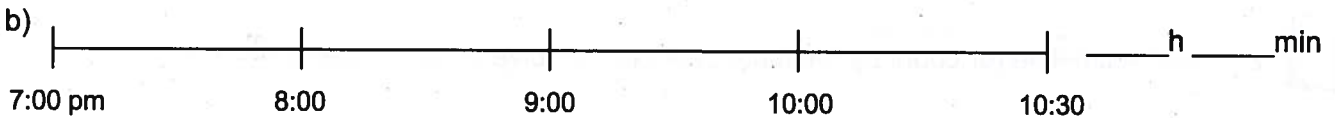
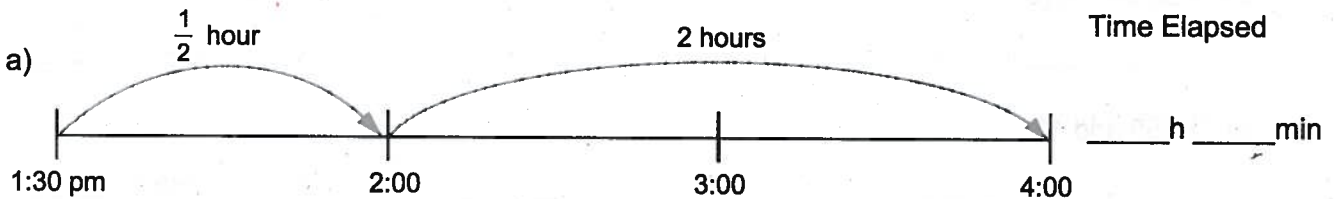
b) 120 minutes

30 60 90

3 half hours

c) 210 minutes

3. Use timeline to find out how much time has passed between the times in bold.



4. Each period at Anne's school is half an hour long.
How many periods are in 120 minutes? Show your work.

5. Carmen arrived at the zoo at 3:30 pm. She left at 6:00 pm.
How long did she stay at the zoo? (Draw a timeline.)

